



2nd  
Basic

3rd  
Advanced

# Helping With Math

USA  
GRADES

Time: AM and PM

Suitable for students  
**aged 6-8**




This pack is suitable for learners aged 6-8 years old or 2nd and 3rd grades (USA). The content covers fact files and relevant basic and advanced activities involving Time: AM and PM.



Hanukkah is known as the festival of lights celebrated by the Jewish people. The eight nights and days observance commemorate the time when Jews rose against their oppressors in the Maccabean.

Can you tell me where is the morning and evening in these pictures?



\_\_\_\_\_

\_\_\_\_\_



## TIME: AM AND PM


There are 24 hours in one day that is divided into two parts. Each part is 12 hours long.

AM

- It is also called morning
- It is the time between midnight and noon
- It means *Ante Meridiem*, which means “before midday.”

PM

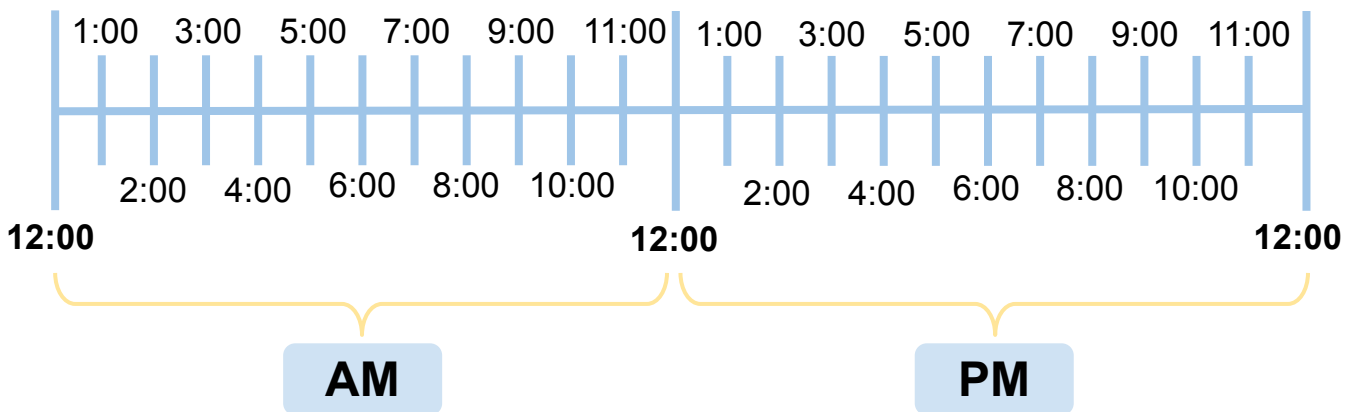
- It is used when it is afternoon and evening
- It is the time from noon to midnight.
- PM means *Post Meridiem* that means “after midday.”



Midnight

Midday

Midnight



- You can write AM and PM in either small or capital letters.
- An excellent way to remember the AM and PM is that 12:00 am means the starting of the day, even though it looks like the middle of the night. However, date changes at 12:00 AM and new day begins.



## TIME: AM AND PM

Some people don't use AM and PM when telling time as they use the 24-hour clock that is also known as the military clock.



The 24-hour clock begins at 00:00 at the start of a new day. This means 12:00 am in the 12-hour clock.

14:00

A day reaches to 23:59, and then it is where the clock resets at 00:00



Coleen was tasked to finish decorating the table at 7:15 in the evening because the party would start at 8:00. What time will Coleen complete her task?

\_\_\_\_\_

## DID YOU KNOW?

As the sign of celebration of Jewish people, the menorah is lit with oil. It was only enough for one day, but miraculously the candles are said to have lit for eight whole days, which is why Hanukkah is now celebrated as an eight-day festival.



# TABLE OF ACTIVITIES

Age 6-7 (Basic) <u>2nd Grade</u>	
1	Tik Tok Time!
2	Candle Sequence
3	Busiest Hanukkah
4	Israel Celebration
5	The Hanukkah Timeline
Age 7-8 (Advanced) <u>3rd Grade</u>	
6	Color Wax
7	Give me my Hanukkah Gelt!
8	The Dreidel Game
9	Three Pics at a Time
10	Find me in the Activities




# TIK TOK TIME!

G2  
Basic


In the eight days of the festival, there are different activities and time schedules. Look at the clock and phrases carefully. Write the time with AM and PM.

1




Brushing teeth in the morning

2




Children playing dreidel after lunch

3



Preparing to bed

4



Buying ingredients before noon



# CANDLE SEQUENCE

G2  
Basic

Menorah is the ancient lampstand that has nine branches used in celebrating Hanukkah. Arrange the time from earliest to latest. Write it in the candles from left to the right.

5:40 AM

2:05 PM

10:47 AM

3:00 AM

12:38 PM

12:14 AM

11:15 AM

8:35 PM

4:16 PM

12:14  
AM



# BUSIEST HANUKKAH

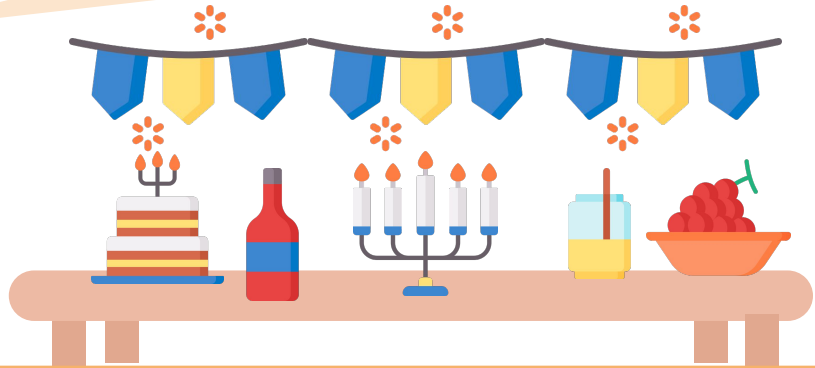
G2  
Basic

Households are busy preparing for Hanukkah. Help Donna solve the time problems to manage her day with her family.

It's the third day of hanukkah, can you help me prepare?



Donna



1 Donna's mother starts to prepare the ingredients for the feast at 5 o'clock in the morning. What time did her mother prepare?

2 The neighbors begin to arrive at 5:45 in the afternoon. When did the neighbors arrive?

3 Donna's family lit up the menorah at 8 o'clock in the evening. What time did they light up the menorah?

4 The party is finished at exactly midnight, and everyone is preparing to sleep. What time does the party finish?



# ISRAEL CELEBRATION


G2  
Basic

Hanukkah is also celebrated in Israel. Determine if the activities are done in AM or PM. Check the yellow box if AM and blue if PM.

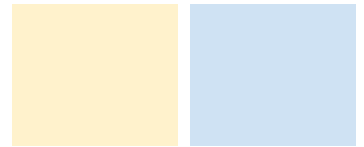
Students present plays after their classes in the afternoon.




Workers display menorahs in their buildings in their morning shift.



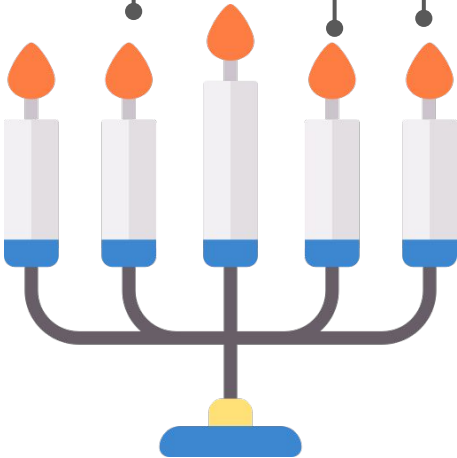

Children choir sings holiday songs after dinner



Annual relay from Mondri'in to Jerusalem is done before sunset.



Visitors are eating fried foods for dinner.





# THE HANUKKAH TIMELINE


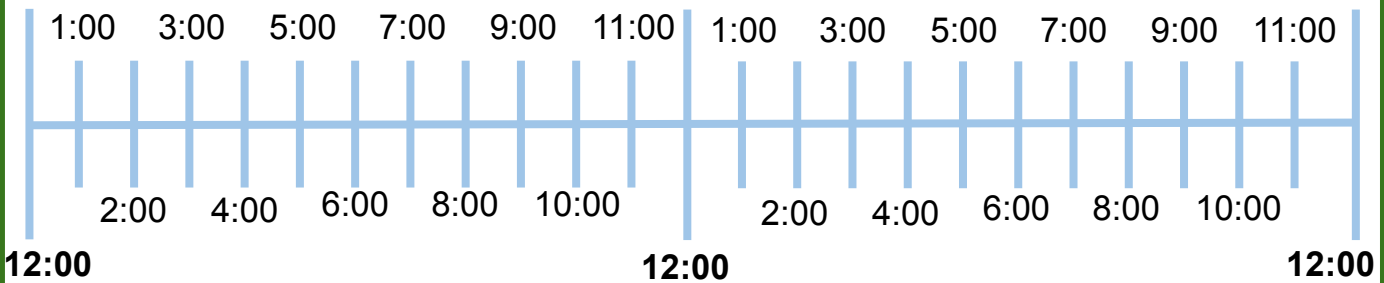
G2  
Basic

Latkes, known as potato pancakes and sufganiyot or doughnuts, are famous in Hanukkah. Cut and paste the latkes if it is AM and sufganiyot if it is PM in the timeline.



Let's find the time in the timeline! Go!






6:15 am	8:00 am	10:00 pm
3:00 pm	4:30 am	5:00 pm
12:00 pm		



# COLOR WAX

G3  
Advanced

Blue and white, sometimes silver, are the color of Hanukkah, according to the Jewish Americans. Color the candles in the left blue if it is AM and gray in the right candle if PM.

1	Going to the party in the evening	
2	Singing lullaby after the party at night	
3	Watching the morning mass in the internet	
4	Preparing lunch for the guests from other states	
5	Receiving hanukkah gelt in the afternoon	




# GIVE ME MY HANUKKAH GELT!

G3  
Advanced



Children receive a gift of money called gelt which is distributed in the form of chocolate coins. Draw the time in the clock and put the symbol moon and sun to know if it is AM or PM.

1





**3:40 PM**

2





**5:00 AM**

3





**10:30 AM**

4



**11:45 PM**

5



**2:35 PM**



# THE DREIDEL GAME

G3  
Advanced

Dreidel is a four-sided spinning top played during Hanukkah. Each side of the top has a phrase. Answer the following questions on each side to reveal the complete Hebrew phrase.

1

Nun

Suppose the menorah is lit up by 6:30 in the evening, but it was lit up 3 hours after the said time. What is the time when the menorah is lit up?

\_\_\_\_\_

2

Gimel

Leah went to the party at 4:00 in the afternoon, and brought latkes. It said to be fried 2 hours before she went to the party? What time did Leah fry the latkes?

\_\_\_\_\_

3

Hei

Jun started to decorate the house at 10:00 in the morning, and he finished after one and a half hours. What is the time Jun finish decorating?

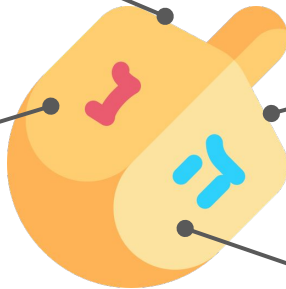
\_\_\_\_\_

4

Shin

Children tried to play dreidel 8:00 in the morning and ended up after 2 hours. What is the time they end their play?

\_\_\_\_\_



“A great miracle happened here”



# THREE PICS AT A TIME

G3  
Advanced

Just like other events, Hanukkah also has different symbols. Let's play a guessing game! Guess the time using the three items in the boxes. Write the time below the boxes.

1

4



---

2



16



---

3


























---



# FIND ME IN THE ACTIVITIES!

G3  
Advanced

Everybody compares the activities they did at the end of Hanukkah. Find the time in the bingo where you can use AM and PM to tell the time. Write the time that you found on the box.

1:00 	12:15 	13:46 	00:00 	4:34 
23:15 	15:05 	7:00 	11:45 	16:08 
8:57 	20:02 	10:10 	5:30 	15:17 
9:11 	7:34 	18:43 	12:45 	6:30 
17:56 	00:10 	11:11 	9:40 	21:00 



# ANSWER GUIDE

## Activity 1

1. 5:00 am
2. 2:50 pm
3. 8:00 pm
4. 11:30 am

## Activity 2

12:14 am, 3:00 am, 5:40 am, 10:47 am, 11:15 am, 12:38 pm, 2:05 pm, 4:16 pm, 8:35 pm.

## Activity 3

1. 5:00 am
2. 5:45 pm
3. 8:00 pm
4. 12:00 am

## Activity 4

1. Blue
2. Yellow
3. Blue
4. Blue
5. Blue

## Activity 5

**AM:** 6:15 am, 8:00 am, 4:30 am  
**PM:** 10:00 pm, 3:00 pm, 5:00 pm, 12:00 pm

## Activity 6

1. Gray
2. Gray
3. Blue
4. Blue
5. Gray

## Activity 7

If the hands of the clocks are correctly points in the right time.

1. Moon
2. Sun
3. Sun
4. Moon
5. Moon

## Activity 8

1. 9:30 pm
2. 2:00 pm
3. 11:30 am
4. 10: am

## Activity 9

1. 4:05 am
2. 6:16 pm
3. 1:05 am

## Activity 10

11:00	11:45	9:11	9:40
12:15	8:57	7:34	
4:34	10:10	6:30	
7:00	5:30	11:11	



# Copyright Notice

This resource is licensed under the [Creative Commons Attribution-NonCommercial 4.0](https://creativecommons.org/licenses/by-nc/4.0/) International license.

You are free to:

- **Share** – copy and redistribute the material in any medium or format
- **Adapt** – remix, transform, and build upon the material

Under the following terms:

- **Attribution** – You must give appropriate credit, provide a link to the license, and indicate if changes were made. You may do so in any reasonable manner, but not in any way that suggests the licensor endorses you or your use.
- **NonCommercial** – You may not use the material for commercial purposes.

For more information on this license, visit the following link:

<http://creativecommons.org/licenses/by-nc/4.0/>

Where possible, free-use images are sourced from online repositories such as Wikipedia and Wikimedia Commons. References and sources for images are provided in the speaker notes section of this document.

Thank you!





# Thank you

Thank you so much for purchasing and downloading this resource.

We hope it has been useful for you in the classroom and that your students enjoy the activities.

For more teaching and homeschooling resources like this, don't forget to [come back](#) and download the new material we add every week!

Thanks for supporting **Helping With Math**. We can provide teachers with low-cost, high-quality teaching and homeschooling resources because of our loyal subscribers and hope to serve you for many years to come.

- The Entire Helping With Math Team :)

