



Helping With Math

Counting Numbers 1-100 (by ones)



KINDERGARTEN



Below are counting numbers from one to one hundred. Practice reading them aloud with a partner.

1	2	3	4	5	6	7	8	9	10
11	12	13	14	15	16	17	18	19	20
21	22	23	24	25	26	27	28	29	30
31	32	33	34	35	36	37	38	39	40
41	42	43	44	45	46	47	48	49	50
51	52	53	54	55	56	57	58	59	60
61	62	63	64	65	66	67	68	69	70
71	72	73	74	75	76	77	78	79	80
81	82	83	84	85	86	87	88	89	90
91	92	93	94	95	96	97	98	99	100

Counting numbers from 1-100 is fun! Now practice reading them alone.

Counting Numbers 1-100 (by ones)



Number Words from 1-100

one	two	three	four	five	six	seven	eight	nine	ten
eleven	twelve	thirteen	fourteen	fifteen	sixteen	seventeen	eighteen	nineteen	twenty
twenty-one	twenty-two	twenty-three	twenty-four	twenty-five	twenty-six	twenty-seven	twenty-eight	twenty-nine	thirty
thirty-one	thirty-two	thirty-three	thirty-four	thirty-five	thirty-six	thirty-seven	thirty-eight	thirty-nine	forty
forty-one	forty-two	forty-three	forty-four	forty-five	forty-six	forty-seven	forty-eight	forty-nine	fifty
fifty-one	fifty-two	fifty-three	fifty-four	fifty-five	fifty-six	fifty-seven	fifty-eight	fifty-nine	sixty
sixty-one	sixty-two	sixty-three	sixty-four	sixty-five	sixty-six	sixty-seven	sixty-eight	sixty-nine	seventy
seventy-one	seventy-two	seventy-three	seventy-four	seventy-five	seventy-six	seventy-seven	seventy-eight	seventy-nine	eighty
eighty-one	eighty-two	eighty-three	eighty-four	eighty-five	eighty-six	eighty-seven	eighty-eight	eighty-nine	ninety
ninety-one	ninety-two	ninety-three	ninety-four	ninety-five	ninety-six	ninety-seven	ninety-eight	ninety-nine	one hundred

Number and Words Combination

NUMBER S	WORDS	NUMBERS	WORDS
73	seventy-four	75	seventy-six
17	eighteen	19	twenty
57	fifty-eight	59	?
41	?	?	forty-four

Counting Numbers 1-100 (by ones)



Counting Numbers from 1-100

	2								
11		13		15		17		19	20
	22			25	26			29	
	32	33	34		36		38		40
41		43		45	46	47	48		
51	52		54		56		58		60
		63		65		67		69	70
	72		74		76		78		
81	82		84	85		87		89	90
	92	93	94		96		98	99	

Number and Words Combination

NUMBERS	WORDS	NUMBERS	WORDS
9	ten		
		51	fifty-two
60			sixty-three
96			ninety-nine
	twelve		



TABLE OF ACTIVITIES

1. Days of September
2. Pineapple Picking
3. Matchy Matchy!
4. Fruits in the Box
5. Farm Animals
6. Feeding Time
7. 1,2,3 Here We Go!
8. Healthy Veggies
9. Happy Farm Town
10. Fun Farming



DAYS OF SEPTEMBER

Complete the days of the month and answer the question that follows.

SEPTEMBER 2020


SUN	MON	TUE	WED	THU	FRI	SAT
		1				
			30			

How many days are there in a week?



PINEAPPLE PICKING

Below is a pineapple farm. Can you count all pineapple fruits in the picture? Write your answer in word and in number form.



Word Form

Number Form




MATCHY MATCHY!

Encircle the fruits with the numbers being stated. The first one is done for you.


Forty-one



Sixty-nine




Fifty-eight




Seventeen



Ninety-two

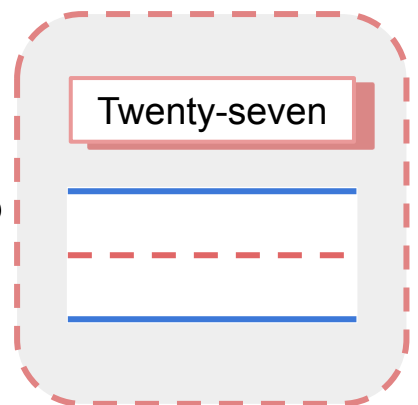
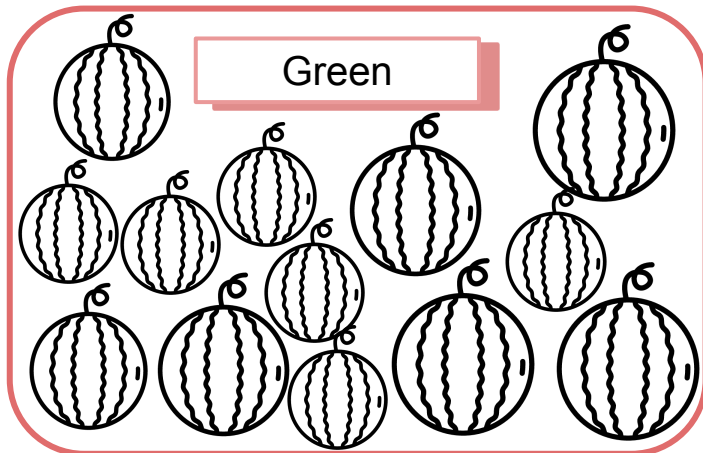
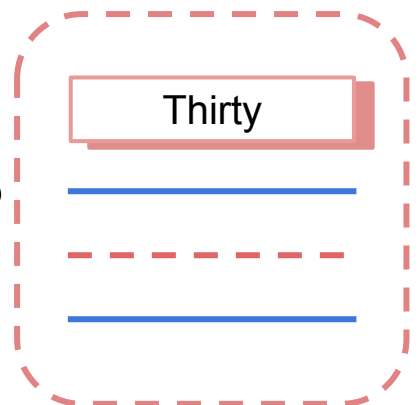
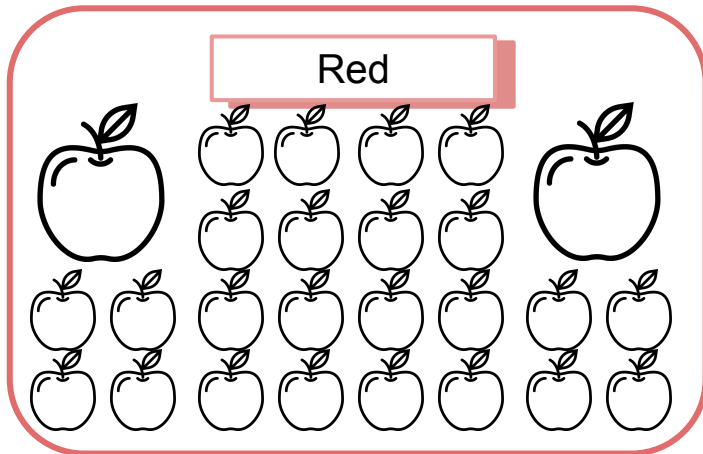
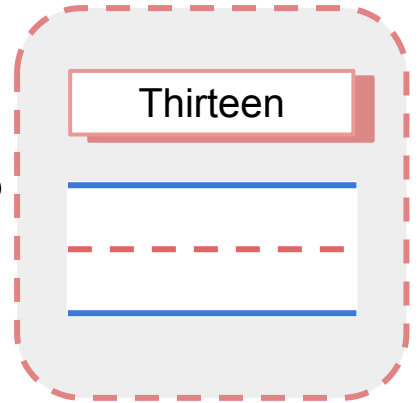
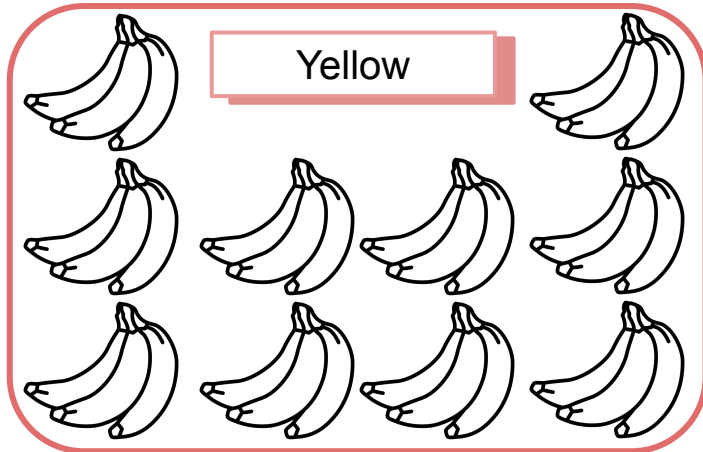


One
Hundred



FRUITS IN THE BOX



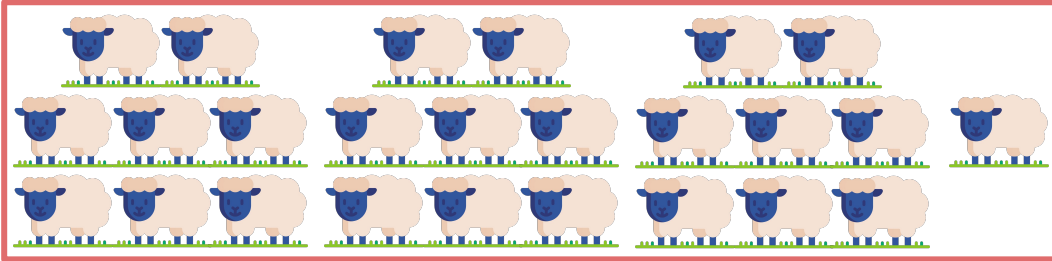


Color the fruits as indicated and draw a line to the box that has its correct number. Write the number, too!



FARM ANIMALS

Count the animals in each group and write it on the box provided.



Number



FEEDING TIME

Below are hungry animals. Feed these animals by drawing the corresponding food item that they need.

12 Carrots



21 Bananas




Counting Numbers 1-100 (by ones)



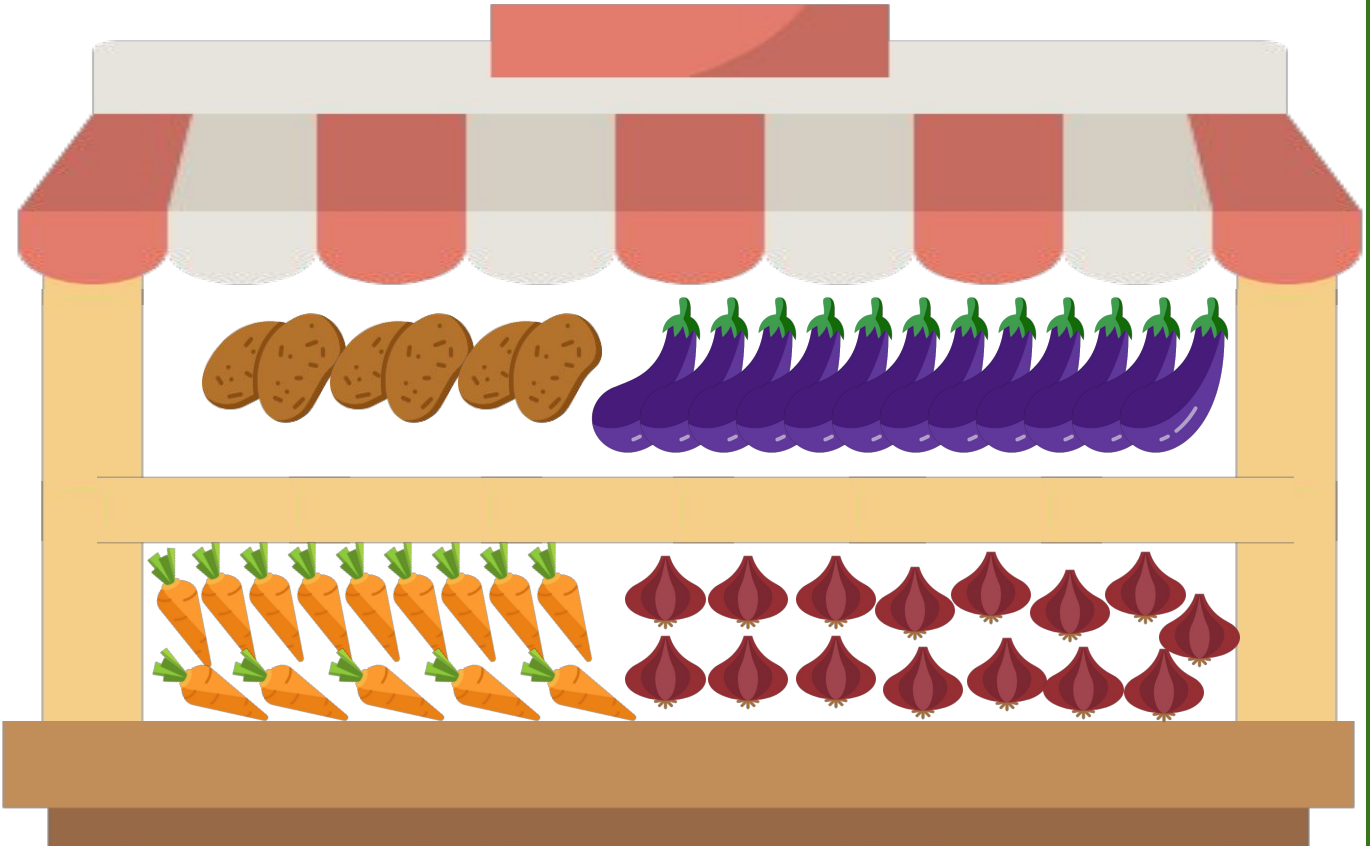
1,2,3 HERE WE GO!

Help Mario the monkey harvest the apples by filling in the missing numbers on the fruit per row.



HEALTHY VEGGIES

How many of each food group are there in this stall? Color each row in the graph to answer this question.



--	--	--	--	--	--	--	--	--	--	--	--	--	--	--	--	--	--	--	--



--	--	--	--	--	--	--	--	--	--	--	--	--	--	--	--	--	--	--	--



--	--	--	--	--	--	--	--	--	--	--	--	--	--	--	--	--	--	--	--




--	--	--	--	--	--	--	--	--	--	--	--	--	--	--	--	--	--	--	--


Which food group has the most number? How about the least?




HAPPY FARM TOWN

Fill in the numbers and solve the addition problem using the items found in the farm.



 _____ pineapples +  _____ apples

= _____




_____  cow + _____  pig

= _____



FUN FARMING

Collect and record the data that is being asked below. Find these items in the farm.



Word Form

Number Form



Handwriting practice lines for the word form. Each row consists of a solid blue top line, a dashed red middle line, and a solid blue bottom line. There are five such rows.

Handwriting practice lines for the number form. Each row consists of a solid blue top line, a dashed red middle line, and a solid blue bottom line. There are five such rows.



Copyright Notice

This resource is licensed under the [Creative Commons Attribution-NonCommercial 4.0](https://creativecommons.org/licenses/by-nc/4.0/) International license.

You are free to:

- **Share** – copy and redistribute the material in any medium or format
- **Adapt** – remix, transform, and build upon the material

Under the following terms:

- **Attribution** – You must give appropriate credit, provide a link to the license, and indicate if changes were made. You may do so in any reasonable manner, but not in any way that suggests the licensor endorses you or your use.
- **NonCommercial** – You may not use the material for commercial purposes.

For more information on this license, visit the following link:

<http://creativecommons.org/licenses/by-nc/4.0/>

Where possible, free-use images are sourced from online repositories such as Wikipedia and Wikimedia Commons. References and sources for images are provided in the speaker notes section of this document.

Thank you!



Thank you

Thank you so much for purchasing and downloading this resource.

We hope it has been useful for you in the classroom and that your students enjoy the activities.

For more teaching and homeschooling resources like this, don't forget to [come back](#) and download the new material we add every week!

Thanks for supporting **Helping With Math**. We can provide teachers with low-cost, high-quality teaching and homeschooling resources because of our loyal subscribers and hope to serve you for many years to come.

- The Entire Helping With Math Team :)

